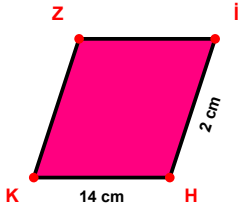
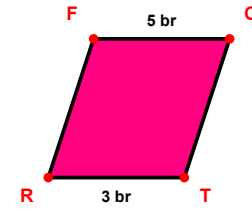


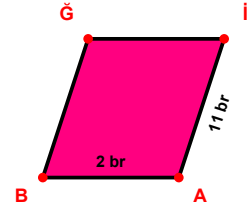
**SORU:** Aşağıdaki şekillerde verilen, kenar uzunlukları farklarını bulunuz.



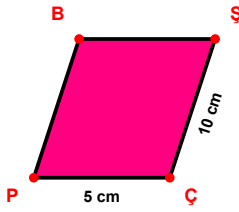
$$|HK| - |iH| = \dots\dots$$



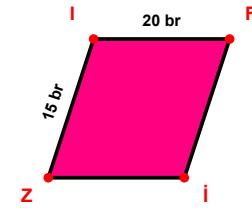
$$|FC| - |TR| = \dots\dots$$



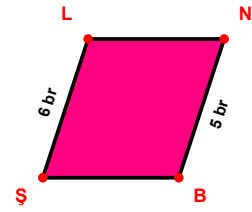
$$|iA| - |AB| = \dots\dots$$



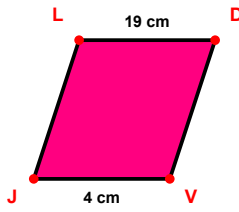
$$|ŞÇ| - |ÇP| = \dots\dots$$



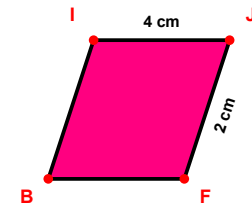
$$|iF| - |Zi| = \dots\dots$$



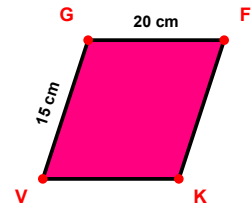
$$|ŞL| - |NB| = \dots\dots$$



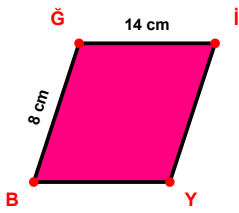
$$|LD| - |VJ| = \dots\dots$$



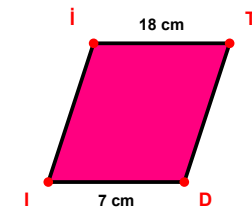
$$|iJ| - |JF| = \dots\dots$$



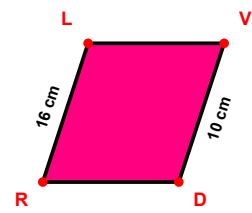
$$|GF| - |VG| = \dots\dots$$



$$|Ği| - |BĞ| = \dots\dots$$

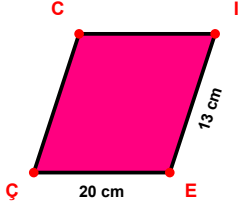


$$|iT| - |Di| = \dots\dots$$

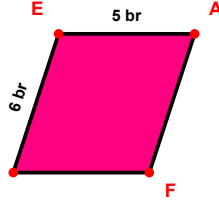


$$|RL| - |VD| = \dots\dots$$

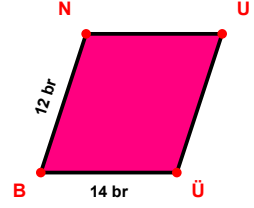
SORU: Aşağıdaki şekillerde verilen, kenar uzunlukları farklarını bulunuz.



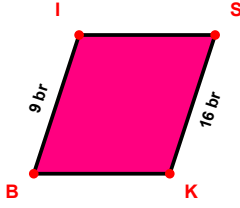
$|EÇ| - |IE| = \dots\dots\dots$



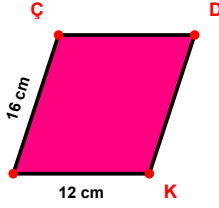
$|JE| - |EA| = \dots\dots\dots$



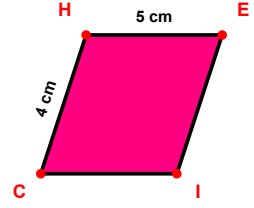
$|ÜB| - |BN| = \dots\dots\dots$



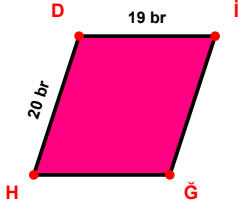
$|SK| - |BI| = \dots\dots\dots$



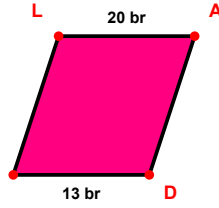
$|VÇ| - |KV| = \dots\dots\dots$



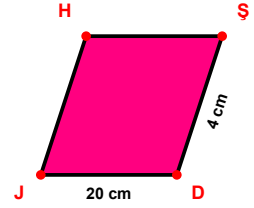
$|HE| - |CH| = \dots\dots\dots$



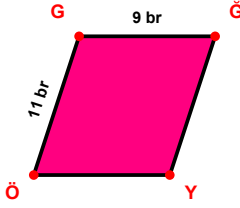
$|HD| - |DI| = \dots\dots\dots$



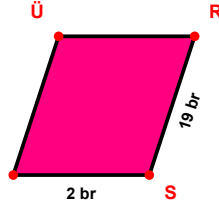
$|LA| - |DH| = \dots\dots\dots$



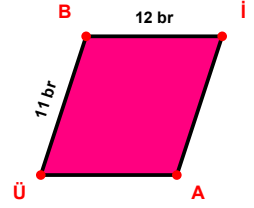
$|DJ| - |ŞD| = \dots\dots\dots$



$|ÖG| - |GĞ| = \dots\dots\dots$



$|RS| - |SC| = \dots\dots\dots$



$|Bİ| - |ÜB| = \dots\dots\dots$

SÜREÇ ODAKLI DEĞERLENDİRME ÖLÇEĞİ

Doğru Sayısı: ..... / 24

Öğretmen ilgili kutucuğu işaretler.

Geliştirilmeli (0-8)

İyi (9-14)

Çok İyi (15-20)

Mükemmel (21-24)

☐☐☐☐

Hazırlayan: .....

Bu bölüme sınıfınızın ilgili kazanıma yönelik genel durumuna ilişkin gözlem ve izlenimlerinizi, öğrencilerinizin bu kazanımla ilgili öğrenme eksikliklerini ve bu eksikliklerin giderilmesi amacıyla yaptığınız/yapmayı planladığınız faaliyetleri not edebilirsiniz.

No	Adı - Soyadı	Toplam Puan	Değerlendirme
1			
2			
3			
4			
5			
6			
7			
8			
9			
10			
11			
12			
13			
14			
15			
16			
17			
18			
19			
20			
21			
22			
23			
24			
25			
26			
27			
28			
29			
30			
31			
32			
33			
34			
35			

Hazırlayan: .....